

Bài 10


PHÉP CỘNG TRONG PHẠM VI 10

TIẾT 4




Số 0 trong phép cộng

a)



$$4 + 0 = ?$$

b)



$$0 + 2 = ?$$



1 Tính nhẩm

$$0 + 4 = 4$$

$$2 + 3 = 5$$

$$3 + 3 = 6$$

$$3 + 1 = 4$$

$$0 + 5 = 5$$

$$4 + 2 = 6$$

$$2 + 2 = 4$$

$$1 + 4 = 5$$

$$6 + 0 = 6$$

2

Số

?

	6	5	4	3	2	1	0
+	1	2	3	4	5	6	7
	7	7	7	7	7	7	7

3

Số


?

a)



$$5 + 0 = 5$$

b)



$$3 + 4 = 7$$

4 Tìm chuồng cho thỏ

